



¿QUÉ HACEMOS AHORA?



**MATERIAL PARA TRABAJAR LAS ÁREAS DE
LENGUA CASTELLANA Y MATEMÁTICAS**



LETRA ESCONDIDA



O

L



R

Í



A

L



P

A



L

Z



L

A



E

Z



G

O

LETRA ESCONDIDA



B

A



O

S




A

R



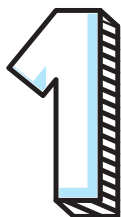
M

S



J

O



U

O



A


Z



B

O

LETRA ESCONDIDA



E

S



B

A



E

A



V

A



E

O



U

E



O


P



C

A

LETRA ESCONDIDA



O

J




E

S



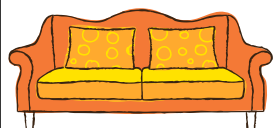
O

O



E

R




S

Á



E

D



O

O



C

E

LETRA ESCONDIDA



V


O



O

S

O



N

U

V



O

E

A



I

R

O



E

Q

Í



P

R

R



C

C

O


LETRA ESCONDIDA



A

T


A



T


A

N



U

R



S


L

L




R

C



E

O



U

E

S



I

E

LETRA ESCONDIDA



O

A

E



P

Y

O



A

Ñ


A



E

O

A



C

E

A



E

U

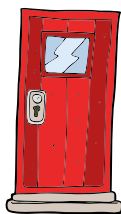
S



H

A

O



U

R

A

SOPA DE LETRAS

c	a	r	a
h	a	l	a
t	a	z	a
n	a	t	a




hola



nota

y	a	d	a	d	a
c	h	u	c	h	e
s	u	a	i	r	a
g	c	a	c	h	e



chuche



coche

s	a	l	s	a	l
n	i	e	v	e	r
d	e	s	q	u	i
s	u	m	a	a	l




salsa



helado

SOPA DE LETRAS

e	l	i	m
p	a	t	o
a	s	u	n
n	o	t	a




pato



lata


e	c	i	n	e	v
c	o	h	e	t	e
a	d	o	n	u	n
p	o	h	a	d	a



cohete



hada



codo

p	e	r	a	r
m	o	s	c	a
b	o	t	ó	n
e	c	a	p	a



mosca



botón



rana

Ordena y forma oraciones

toma

niño

El

sopa

El

cola

perro

tiene

come

pan

El

abuelo

El

abierto

zoo

está

Ordena y forma oraciones

Mimí

al

juega

parchís

La

es

chica

bella

Manel

fútbol

juega

al

No

sin

salgas

abrigo

Ordena y forma oraciones

la

nueva

En

Calle

tarde

bus

llegó

tarde

La

sala

cerrada

está

Tiene


gigante

un


juego

RELACIONA


Estuche



Reloj



Paloma



Amigos



Bicicleta




RELACIONA

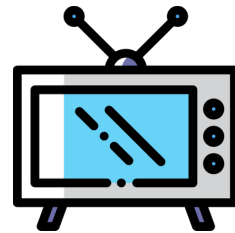
Pan



Sandía



Brocoli



Televisor




Oso




RELACIONA


Fuego




Hueso




Jersey



Manoplas




Esfera

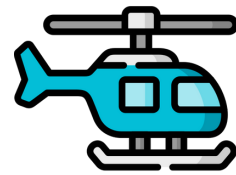


RELACIONA

Avión



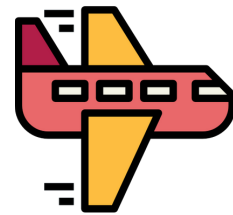
Autobús



Camión



Moto



Helicóptero




ADIVINA


Si a Pinocho le quito CHO
¿Qué nos queda?



Si a ballena le quito BA
¿Qué nos queda?



Si a camilla le quito BI
¿Qué nos queda?




ADIVINA


Si a paloma le quito MA
¿Qué nos queda?



Si a plátano le quito NO
¿Qué nos queda?




Si a cereza le quito ZA
¿Qué nos queda?

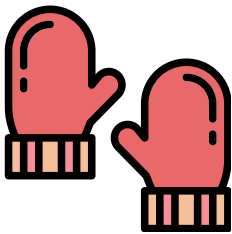


ADIVINA


Si a pelusa le quito LU ¿Qué nos queda?



Si a manopla le quito PLA
¿Qué nos queda?



Si a medusa le quito DU
¿Qué nos queda?




COMPLETAMOS CON SÍLABAS




ZA TO



 RA COL



FANTAS



CÁ RA



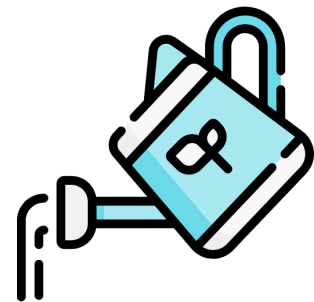
PA TAS



 LLE TA





LE





RE GA RA

ESCRIBE PALABRAS USANDO LA INICIAL DE CADA DIBUJO



ESCRIBE PALABRAS USANDO LA INICIAL DE CADA DIBUJO



AYUDA A ESTOS SAPOS A ORDENAR LAS LETRAS PARA FORMAR PALABRAS



ETNCUO



LÉTOFNLEO



ÁSPALICT



NTPUARI



PÑESAA



OLCGEOI



ERSFA



OCEHC



ITENLRAN

RODEA EL NÚMERO DE PALABRAS QUE TIENEN LAS FRASES

La niña tiene sueño

2

3

4

5

La casa azul

2

3

4

5

Mi hermano se llama Jorge

2

3

4

5

Papá duerme

2

3

4

5

Tengo 7 años

2

3

4

5

Mamá está muy contenta

2

3

4

5

RODEA EL NÚMERO DE PALABRAS QUE TIENEN LAS FRASES

Luis es mi amigo

2 3 4 5

Mi tía tiene dos coches

2 3 4 5

Me gusta jugar con Tania

2 3 4 5

Lucía canta

2 3 4 5

Mi padre es cocinero

2 3 4 5

Llueve mucho

2 3 4 5

ESCRIBE DOS PALABRAS QUE EMPIECEN POR...

PA

--	--

SE

--	--

DO

--	--

TI

--	--

CU

--	--

ZA

--	--

RE

--	--

ESCRIBE DOS PALABRAS QUE EMPIECEN POR...

BE

--	--

FI

--	--

JO

--	--

GA

--	--

MU

--	--

NA


--	--

VA

--	--


TRES EN RAYA

Coloca y resuelve

 $46 + 23$

D

U




@derechoavolar

@rociptsevilla


@susanaalbances

Coloca y resuelve

 $12 + 34$

D

U



@derechoavolar

@rociptsevilla


@susanaalbances

Coloca y resuelve

 $50 + 9$

D

U




@derechoavolar

@rociptsevilla


@susanaalbances

Coloca y resuelve

 $27 + 40$

D

U




@derechoavolar

@rociptsevilla


@susanaalbances

Coloca y resuelve

 $61 + 34$

D

U



@derechoavolar

@rociptsevilla


@susanaalbances

Coloca y resuelve

 $87 + 2$

D

U




@derechoavolar

@rociptsevilla


@susanaalbances

Coloca y resuelve

 $31 + 47$

D

U




@derechoavolar

@rociptsevilla


@susanaalbances

Coloca y resuelve

 $58 + 10$

D

U




@derechoavolar

@rociptsevilla


@susanaalbances

Coloca y resuelve

 78 - 15

D

U




@derechoavolar

@rociptsevilla


@susanaalbances

Coloca y resuelve

 94 - 23

D

U




@derechoavolar

@rociptsevilla


@susanaalbances

Coloca y resuelve

 41 - 30

D

U




@derechoavolar

@rociptsevilla


@susanaalbances

Coloca y resuelve

 59 - 42

D

U




@derechoavolar

@rociptsevilla


@susanaalbances

Coloca y resuelve

 67 - 5

D

U




@derechoavolar

@rociptsevilla


@susanaalbances

Coloca y resuelve

 73 - 12

D

U




@derechoavolar

@rociptsevilla


@susanaalbances

Coloca y resuelve

 84 - 41

D

U




@derechoavolar

@rociptsevilla


@susanaalbances

Coloca y resuelve

 96 - 25

D

U




@derechoavolar

@rociptsevilla

@susanaalbances

Coloca y resuelve

 $2 + 4 + 3$

	<input type="text"/>
	<input type="text"/>
<input type="text"/>	<input type="text"/>
<hr/>	
	<input type="text"/>

@derechoavolar @rociptsevilla @susanaalbances


Coloca y resuelve

 $5 + 4 + 1$

	<input type="text"/>
	<input type="text"/>
<input type="text"/>	<input type="text"/>
<hr/>	
	<input type="text"/>

@derechoavolar @rociptsevilla @susanaalbances

Coloca y resuelve

 $6 + 2 + 0$

	<input type="text"/>
	<input type="text"/>
<input type="text"/>	<input type="text"/>
<hr/>	
	<input type="text"/>

@derechoavolar @rociptsevilla @susanaalbances


Coloca y resuelve

 $7 + 1 + 5$

	<input type="text"/>
	<input type="text"/>
<input type="text"/>	<input type="text"/>
<hr/>	
	<input type="text"/>

@derechoavolar @rociptsevilla @susanaalbances


Coloca y resuelve

 $5 + 2 + 3$

	<input type="text"/>
	<input type="text"/>
<input type="text"/>	<input type="text"/>
<hr/>	
	<input type="text"/>

@derechoavolar @rociptsevilla @susanaalbances


Coloca y resuelve

 $8 + 2 + 4$

	<input type="text"/>
	<input type="text"/>
<input type="text"/>	<input type="text"/>
<hr/>	
	<input type="text"/>

@derechoavolar @rociptsevilla @susanaalbances


Coloca y resuelve

 $9 + 0 + 3$

	<input type="text"/>
	<input type="text"/>
<input type="text"/>	<input type="text"/>
<hr/>	
	<input type="text"/>

@derechoavolar @rociptsevilla @susanaalbances


Coloca y resuelve

 $2 + 3 + 4$

	<input type="text"/>
	<input type="text"/>
<input type="text"/>	<input type="text"/>
<hr/>	
	<input type="text"/>

@derechoavolar @rociptsevilla @susanaalbances


Coloca y resuelve

 $1 + 3 + 5$

	<input type="text"/>
	<input type="text"/>
<input type="text"/>	<input type="text"/>
<hr/>	
	<input type="text"/>

@derechoavolar @rociptsevilla @susanaalbances


Coloca y resuelve

 $2 + 4 + 6$

	<input type="text"/>
	<input type="text"/>
<input type="text"/>	<input type="text"/>
<hr/>	
	<input type="text"/>

@derechoavolar @rociptsevilla @susanaalbances

Coloca y resuelve

 $6 + 3 + 1$

	<input type="text"/>
	<input type="text"/>
<input type="text"/>	<input type="text"/>
<hr/>	
	<input type="text"/>


@derechoavolar @rociptsevilla @susanaalbances

Coloca y resuelve

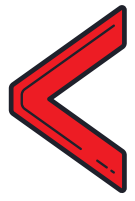
 $4 + 2 + 5$

	<input type="text"/>
	<input type="text"/>
<input type="text"/>	<input type="text"/>
<hr/>	
	<input type="text"/>

@derechoavolar @rociptsevilla @susanaalbances



MAYOR O MENOR QUE



42

53

16

9

94

72

55

65

34

43

8

12

19

20

61

80

37

15

10


40

28

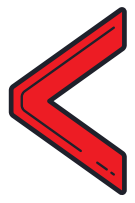
19

73

62



MAYOR O MENOR QUE



87

23

30

16

54

27

7

71

62

87

44

26

99

89

18

3

11

54

62

53

80

90

28

14

ANTERIOR Y POSTERIOR

← 24 →

← 83 →

← 75 →

← 51 →

← 48 →

← 32 →

← 15 →

← 60 →

← 97 →












← 49 →

← 58 →




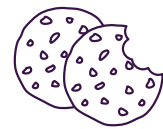








← 27 →

← 86 →













← 90 →















**Contamos de
1 en 1**














**Contamos de
2 en 2**













**Contamos de
3 en 3**



**Contamos de
4 en 4**



**Contamos de
5 en 5**



**Contamos de
6 en 6**

¿CÓMO SE ESCRIBEN ESTOS NÚMEROS?

9

15

18

23

39

48

57


62

DIBUJA

Dos líneas rectas



Dos líneas curvas abiertas




Dos líneas curvas cerradas



¿CUÁNTOS ÁRBOLES QUEDAN?


RESTA




$$\square \ominus \square = \square$$



$$\square \ominus \square = \square$$




$$\square \ominus \square = \square$$



$$\square \ominus \square = \square$$







$$\square \ominus \square = \square$$



$$\square \ominus \square = \square$$

¿CUÁNTAS COPOS FALTAN PARA SER 10?



SUMA 10 A CADA UNO Y COMPLETA

$0 + =$

$1 + =$

$2 + =$

$3 + =$

$4 + =$

$5 + =$

$6 + =$

$7 + =$

$8 + =$

$9 + =$